


Fractions on Number Line

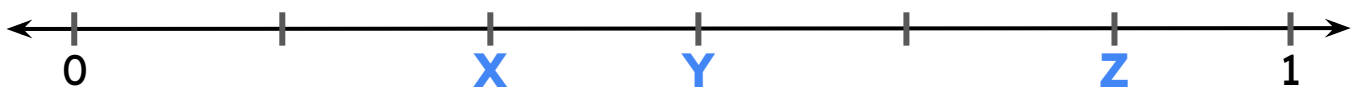
Identify the fractions marked by the given letters on the number line.



A = _____

B = _____

C = _____



X = _____

Y = _____

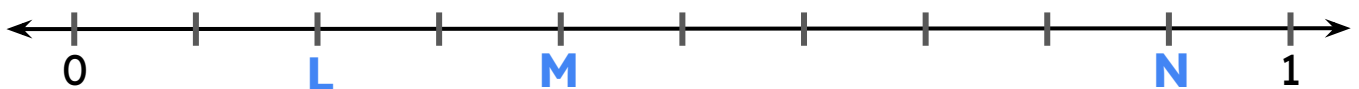
Z = _____



P = _____

Q = _____

R = _____



L = _____

M = _____

N = _____

