


Minutes Past/To (A)

Look at the position of the hands in each clock and fill in the blanks.


1



_____ minutes past _____

Detailed description: A circular analog clock with numbers 1-12. The hour hand is between 3 and 4, closer to 3. The minute hand points to 5. The hands are orange.


2



_____ minutes to _____

Detailed description: A circular analog clock with numbers 1-12. The hour hand is between 10 and 11, closer to 10. The minute hand points to 2. The hands are orange.


3



_____ minutes past _____

Detailed description: A circular analog clock with numbers 1-12. The hour hand is between 1 and 2, closer to 1. The minute hand points to 2. The hands are orange.


4



_____ minutes past _____

Detailed description: A circular analog clock with numbers 1-12. The hour hand is between 12 and 1, closer to 12. The minute hand points to 4. The hands are orange.


5



_____ minutes past _____

Detailed description: A circular analog clock with numbers 1-12. The hour hand is between 9 and 10, closer to 9. The minute hand points to 4. The hands are orange.

6



_____ minutes to _____

Detailed description: A circular analog clock with numbers 1-12. The hour hand is between 6 and 7, closer to 7. The minute hand points to 8. The hands are orange.