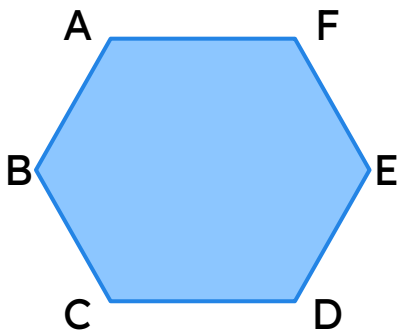


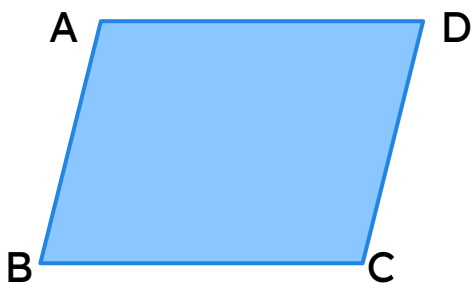
Parallel Sides in 2D Shapes

Identify and complete the pairs of parallel sides for each shape.



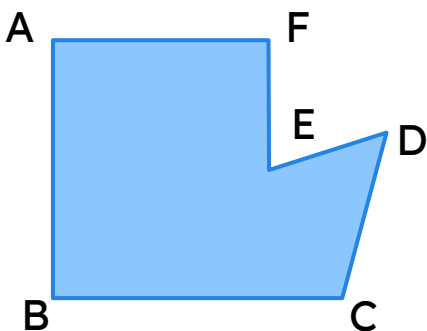
AB || _____

BC || _____



AB || _____

BC || _____



AF || _____

AB || _____

