

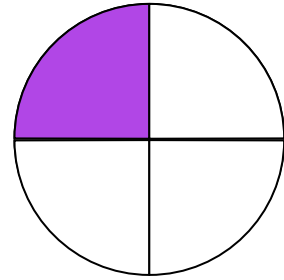
Make a Whole

Shade the given model to identify the missing fraction and correctly complete the statements.

$$\frac{1}{4}$$

and

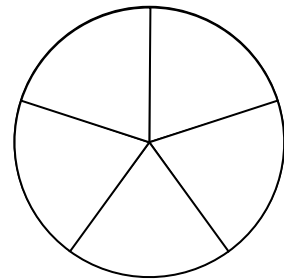
make a whole.



and

$$\frac{2}{5}$$

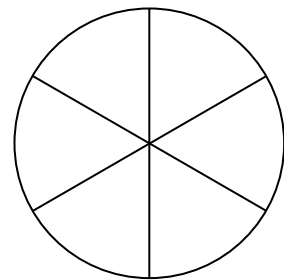
make a whole.



$$\frac{4}{6}$$

and

make a whole.



and

$$\frac{3}{8}$$

make a whole.

