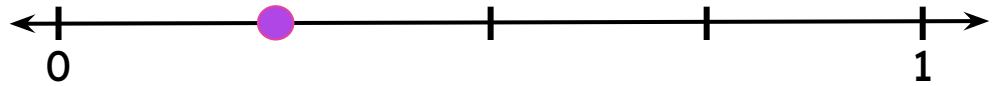


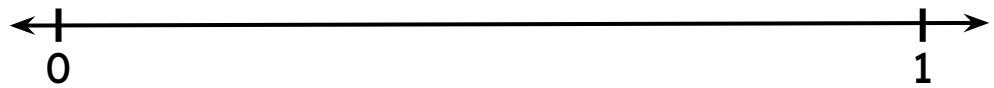
# Fractions on Number Line

Divide the number line into equal parts and mark the given fraction.

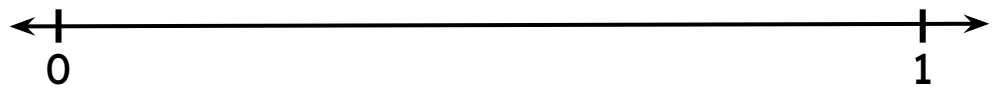
$$\frac{1}{4}$$




$$\frac{2}{3}$$




$$\frac{5}{8}$$



$$\frac{2}{5}$$



$$\frac{8}{12}$$



$$\frac{5}{10}$$

