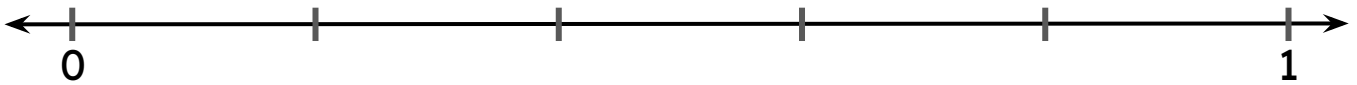


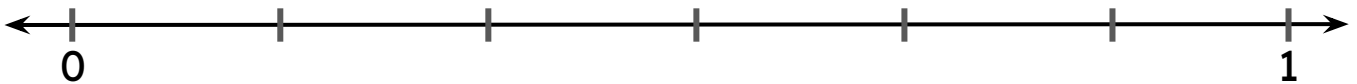
Fractions on Number Line

Mark the given fractions on the number line.

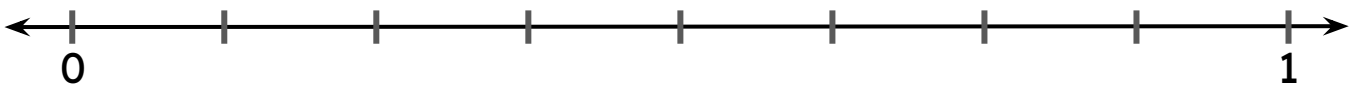
Mark $\frac{1}{5}$, $\frac{2}{5}$ and $\frac{4}{5}$ on the number line.



Mark $\frac{1}{6}$, $\frac{2}{6}$ and $\frac{4}{6}$ on the number line.



Mark $\frac{2}{8}$, $\frac{4}{8}$ and $\frac{7}{8}$ on the number line.



Mark $\frac{3}{10}$, $\frac{6}{10}$ and $\frac{9}{10}$ on the number line.

