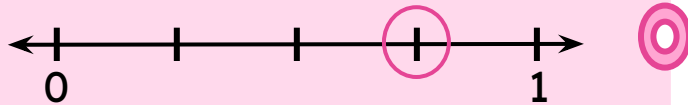
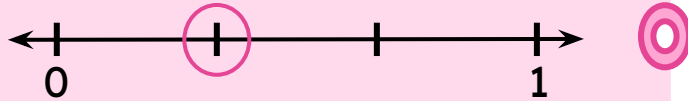


Matching Fractions on Number Line

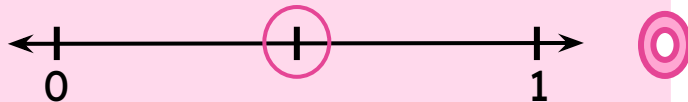
Match the fractions with the correct number lines they are represented on.



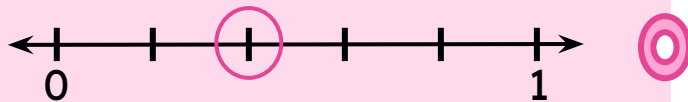
$\frac{1}{2}$



$\frac{2}{5}$



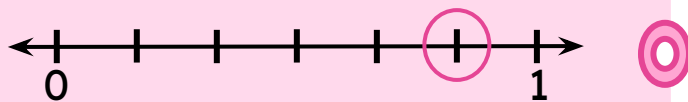
$\frac{3}{5}$



$\frac{3}{4}$



$\frac{5}{6}$



$\frac{1}{3}$

