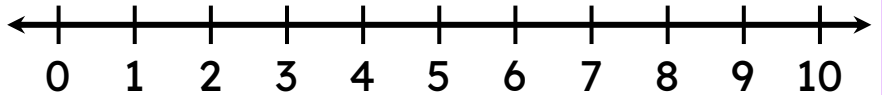


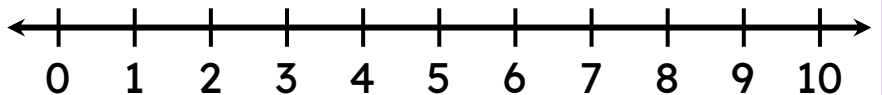
Subtraction Using a Number Line

Draw jumps on the number line to find the missing number.

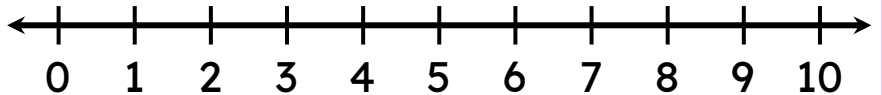
$$7 - \square = 5$$



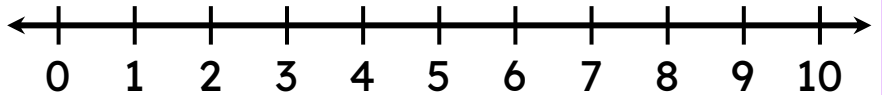
$$6 - \square = 3$$



$$8 - \square = 7$$



$$7 - \square = 2$$



$$9 - \square = 3$$

