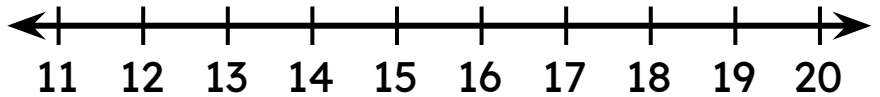


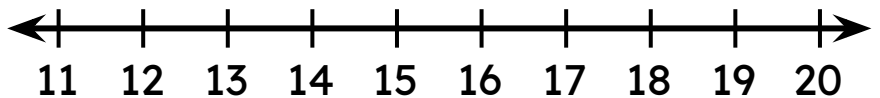
Subtraction on a Number Line

Draw jumps on the number line to find the missing number.

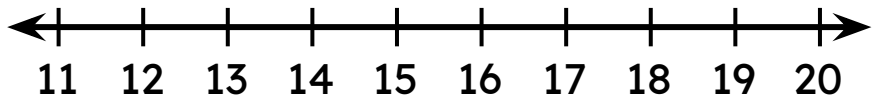
$18 - \square = 14$



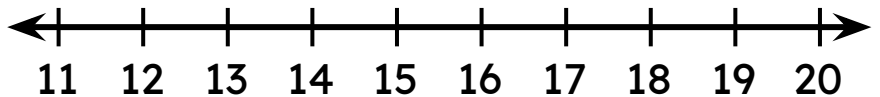
$20 - \square = 17$



$17 - \square = 12$



$19 - \square = 15$



$14 - \square = 11$

