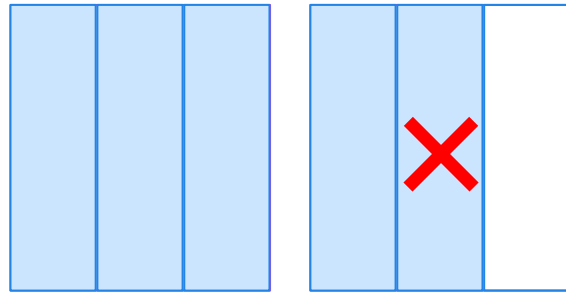


Is the Model Correct?

Circle "True" or "False" to indicate whether the given model represents the result of the mixed number subtraction.

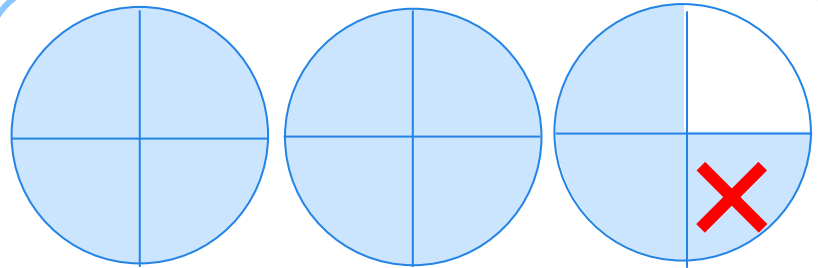
$$1\frac{2}{3} - \frac{1}{3}$$



True

False


$$2\frac{3}{4} - 1\frac{1}{4}$$



True

False

$$2\frac{1}{5} - 1\frac{1}{5}$$



True

False

