


Identify the Hundredth

Circle the decimal that each model represents.




0.33

0.37

3.7

3.3




0.15

1.5

10.5

0.05



0.14

2.4

0.24

1.4

