


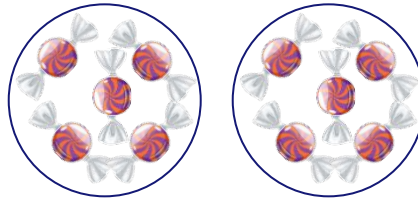
## Complete the Sentences (A)

Complete the multiplication and division sentences for the given models.



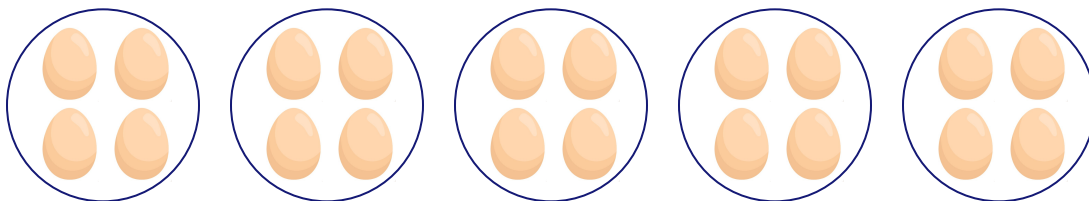
$$\square \times \square = \square$$

$$\square \div \square = \square$$



$$5 \times 2 = \square$$

$$10 \div 2 = \square$$



$$\square \times 5 = \square$$

$$\square \div \square = 4$$