


Multiply Fractions

Multiply the fractions and compare the products using $<$, $>$ or $=$.


Hint: Compare the different fractions on each side.

$$\frac{7}{2} \times \frac{5}{3}$$




$$\frac{7}{2} \times \frac{4}{3}$$

$$\frac{1}{5} \times \frac{1}{4}$$




$$\frac{1}{6} \times \frac{1}{5}$$

$$\frac{3}{4} \times \frac{5}{3}$$



$$\frac{7}{3} \times \frac{3}{4}$$

$$\frac{3}{12} \times \frac{6}{11}$$



$$\frac{8}{11} \times \frac{3}{12}$$

