


Multiplication Sentence

Fill in the missing numbers to find the total number of objects.

1



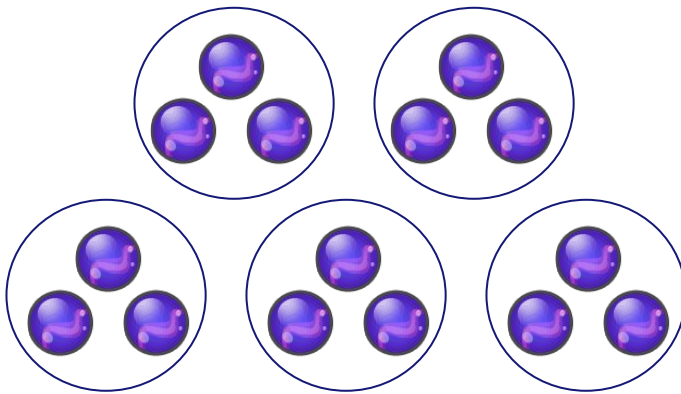
___ groups of ___ apples each.

= ___ + ___ + ___ + ___

= ___ × ___

= _____

2




___ groups of ___ marbles each.

= ___ + ___ + ___ + ___ + ___

= ___ × ___

= _____

3



___ groups of ___ boats each.

= ___ + ___ + ___

= ___ × ___

= _____