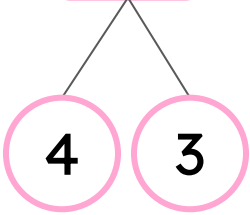


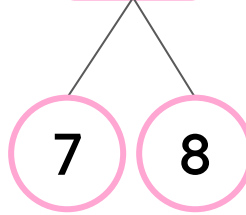
Near Doubles Subtraction Strategy

Find the difference using near doubles subtraction strategy.

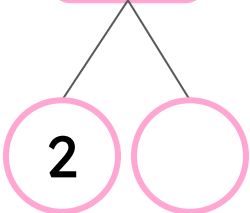
$$7 - 4 = \square$$



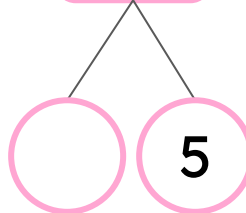
$$15 - 7 = \square$$



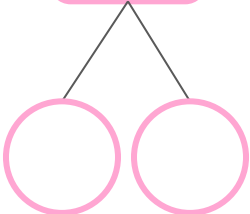
$$5 - 2 = \square$$



$$11 - 6 = \square$$



$$7 - 3 = \square$$



$$17 - 8 = \square$$

