


Number Bonds (B)


All the dots have fallen off the butterfly's wings. In how many ways can we put them back together?

1

Draw and color 4 dots in all.




$\textcircled{2}$ and $\textcircled{2}$ make $\textcircled{4}$




$\textcircled{1}$ and $\textcircled{3}$ make $\textcircled{4}$

2

Draw and color 6 dots in all.



$\textcircled{\quad}$ and $\textcircled{\quad}$ make $\textcircled{\quad}$



$\textcircled{\quad}$ and $\textcircled{\quad}$ make $\textcircled{\quad}$