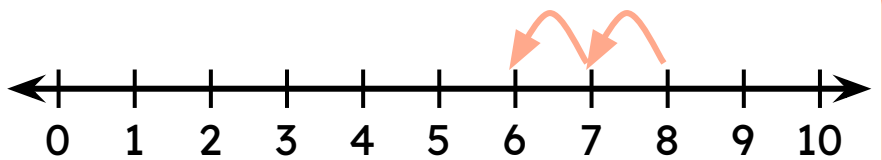


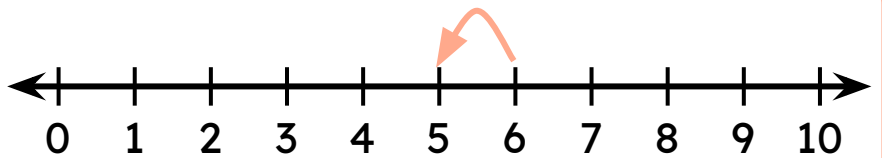
Number Line Subtraction

Read the number line to find the difference.

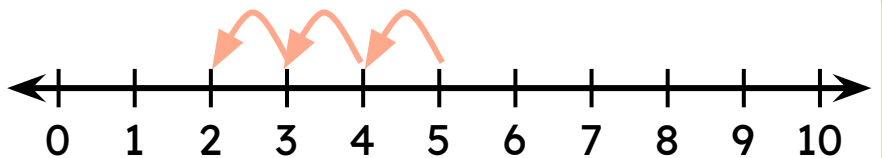
$8 - 2 = \square$



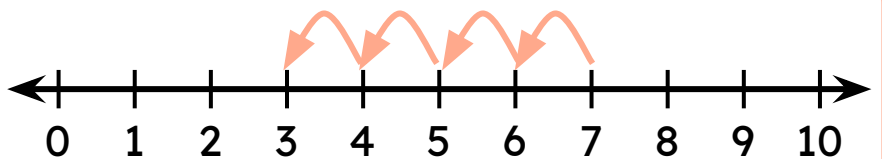
$6 - 1 = \square$



$5 - 3 = \square$



$7 - 4 = \square$



$9 - 5 = \square$

