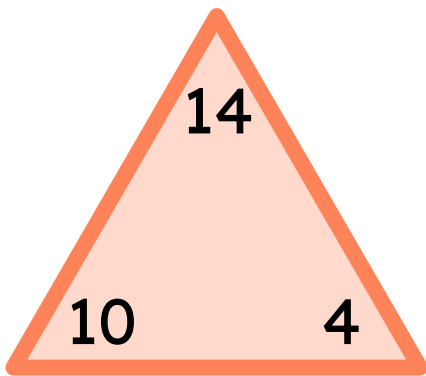


Addition-Subtraction Fact Triangle

Refer the addition-subtraction fact triangle and complete the number sentences by putting the correct symbol.

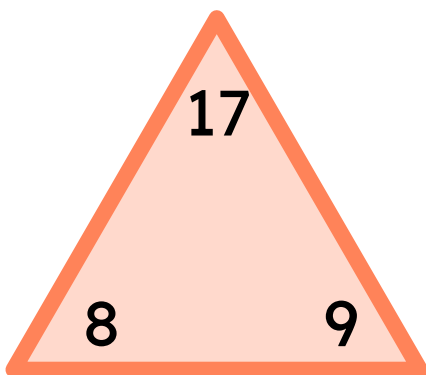


$10 \bigcirc 4 = 14$

$14 \bigcirc 4 = 10$

$14 \bigcirc 10 = 4$

$4 \bigcirc 10 = 14$

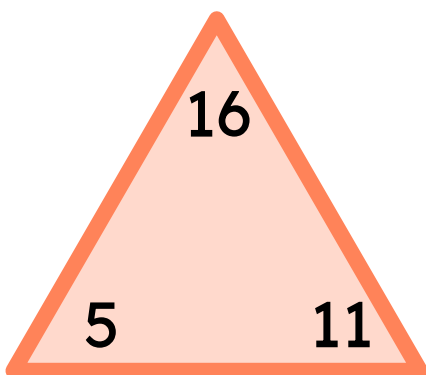


$17 \bigcirc 8 = 9$

$17 \bigcirc 9 = 8$

$8 \bigcirc 9 = 17$

$9 \bigcirc 8 = 17$



$11 \bigcirc 5 = 16$

$5 \bigcirc 11 = 16$

$16 \bigcirc 5 = 11$

$16 \bigcirc 11 = 5$

