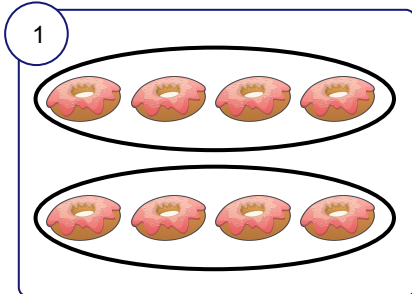


Repeated Addition and Multiplication

Write a repeated addition sentence and a multiplication sentence for each model.




Repeated Addition:

$$\square + \square = \square$$

Multiplication:

$$\square \times \square = \square$$

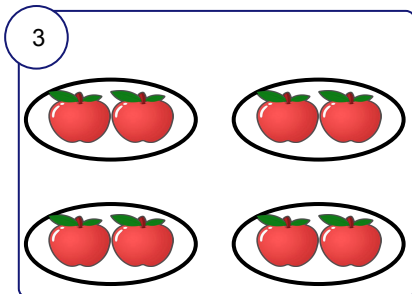


Repeated Addition:

$$\square + \square + \square = \square$$

Multiplication:

$$\square \times \square = \square$$

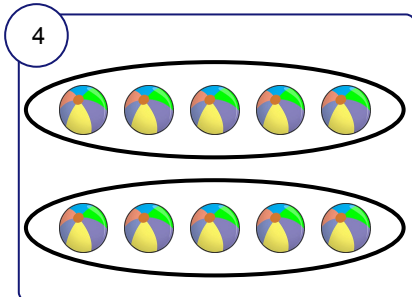


Repeated Addition:

$$\square + \square + \square + \square = \square$$

Multiplication:

$$\square \times \square = \square$$

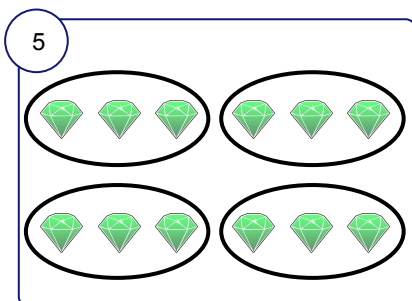


Repeated Addition:

$$\square + \square = \square$$

Multiplication:

$$\square \times \square = \square$$



Repeated Addition:

$$\square + \square + \square + \square = \square$$

Multiplication:

$$\square \times \square = \square$$