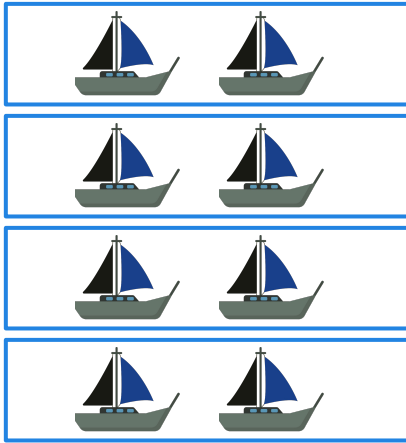


Multiplication expression

For the given arrays, write an addition expression and hence write a multiplicative expression.

4




Addition expression :

$$\square + \square + \square + \square$$

Multiplication expression :

$$\square \times \square$$

5



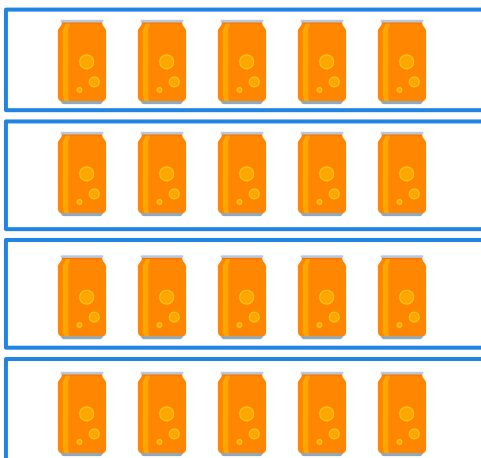
Addition expression :

$$\square + \square + \square + \square$$

Multiplication expression :

$$\square \times \square$$

6



Addition expression :

$$\square + \square + \square + \square$$

Multiplication expression :

$$\square \times \square$$