


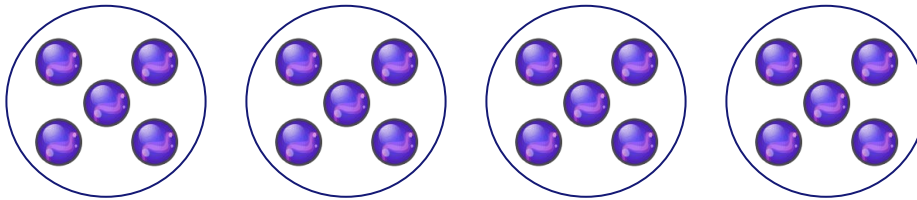
## Complete the Sentences (A)

Use the model to fill in the missing numbers in the sentences.




\_\_\_\_\_ jellies are divided equally into groups of \_\_\_\_\_.

There are \_\_\_\_\_ groups of jellies.



20 marbles are divided equally into groups of 5.

There are \_\_\_\_\_ groups of marbles.



12 boats are divided equally into groups of \_\_\_\_\_.

There are \_\_\_\_\_ groups of boats.