
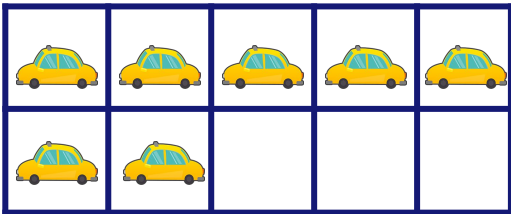


Match the Sentence


Cross out the correct number of objects in the 10-frame to match the statement and write the answer.




$$5 - 1 = \square$$




$$7 - 4 = \square$$



$$6 - 4 = \square$$



$$8 - 7 = \square$$



$$10 - 6 = \square$$