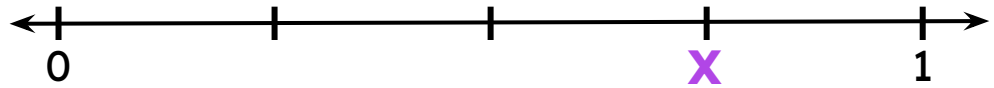


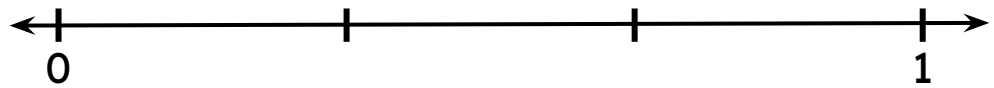
Fractions on Number Line

Mark 'X' to represent the fraction on the number line.

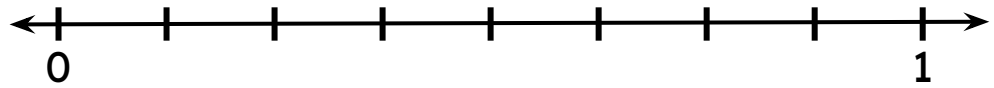
$$\frac{3}{4}$$




$$\frac{2}{3}$$



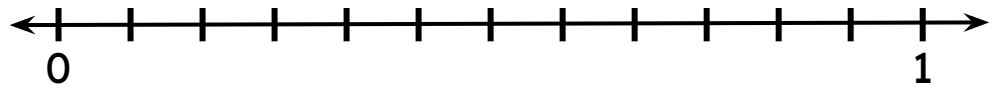
$$\frac{6}{8}$$



$$\frac{2}{5}$$



$$\frac{9}{12}$$



$$\frac{3}{10}$$

