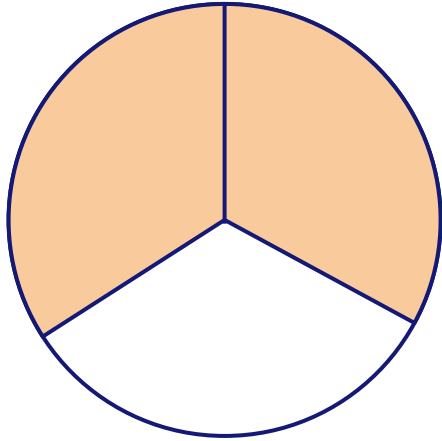


Identify the Fraction

Fill in the missing numbers to represent the shaded part of the shape as fraction.

1

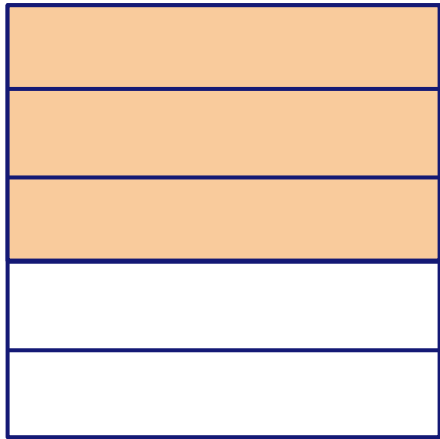


Shaded parts: _____

Total number of equal parts: _____

Fraction: $\frac{\square}{\square}$

2

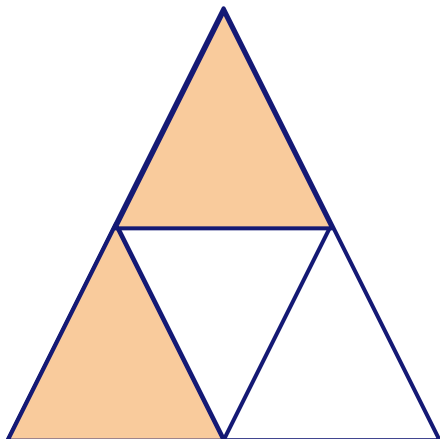


Shaded parts: _____

Total number of equal parts: _____

Fraction: $\frac{\square}{\square}$

3



Shaded parts: _____

Total number of equal parts: _____

Fraction: $\frac{\square}{\square}$