




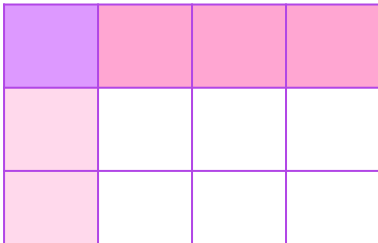





Multiply Unit Fractions

Look at the models and find the product.

	×		=	
<input type="text"/> <hr style="width: 50%; margin: 0 auto;"/> <input type="text"/>		<input type="text"/> <hr style="width: 50%; margin: 0 auto;"/> <input type="text"/>		<input type="text"/> <hr style="width: 50%; margin: 0 auto;"/> <input type="text"/>

	×		=	
<input type="text"/> <hr style="width: 50%; margin: 0 auto;"/> <input type="text"/>		<input type="text"/> <hr style="width: 50%; margin: 0 auto;"/> <input type="text"/>		<input type="text"/> <hr style="width: 50%; margin: 0 auto;"/> <input type="text"/>

	×		=	
<input type="text"/> <hr style="width: 50%; margin: 0 auto;"/> <input type="text"/>		<input type="text"/> <hr style="width: 50%; margin: 0 auto;"/> <input type="text"/>		<input type="text"/> <hr style="width: 50%; margin: 0 auto;"/> <input type="text"/>

