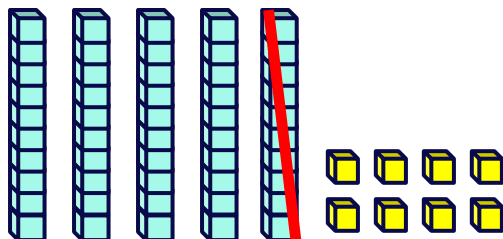


Subtraction Model Representation

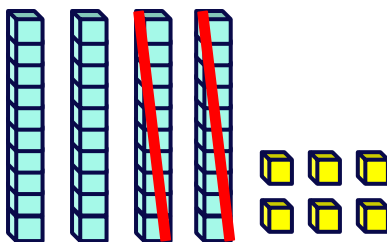
Circle the option that correctly represents the model.



$58 - 1$

$58 - 10$

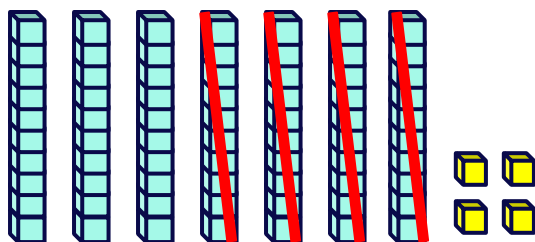
$85 - 10$



$46 - 20$

$64 - 20$

$46 - 2$



$47 - 40$

$74 - 4$

$74 - 40$