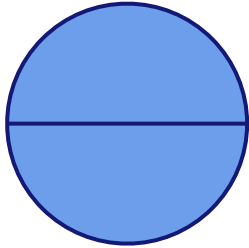
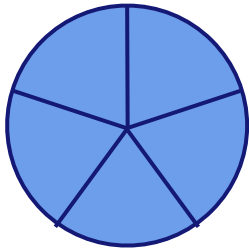


Represent the Whole

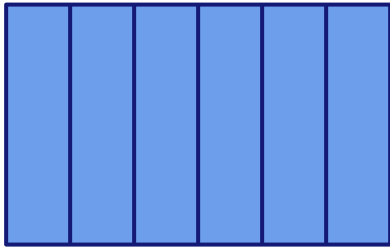
Fill in the missing numbers to represent the whole as fraction.



$$1 \text{ whole} = \frac{\square}{\square}$$



$$1 \text{ whole} = \frac{\square}{\square}$$



$$1 \text{ whole} = \frac{\square}{\square}$$

$$1 \text{ whole} = \frac{\square}{\square}$$

3

$$1 \text{ whole} = \frac{\square}{\square}$$

8