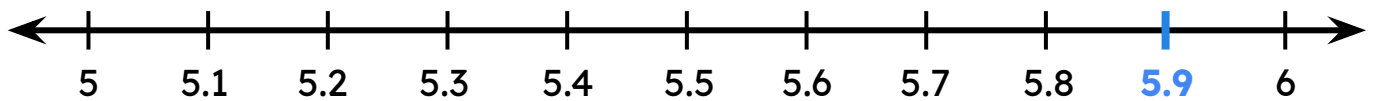


# Rounding to Nearest Whole

Check whether the given statements are true or false.

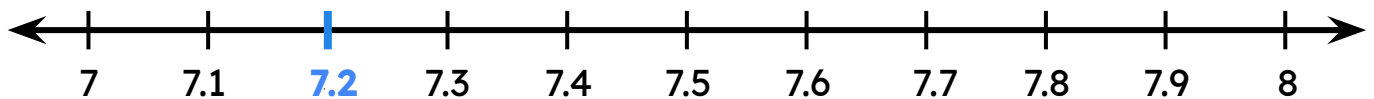
5.9 rounds to 6 when rounded to the nearest whole.



True

False

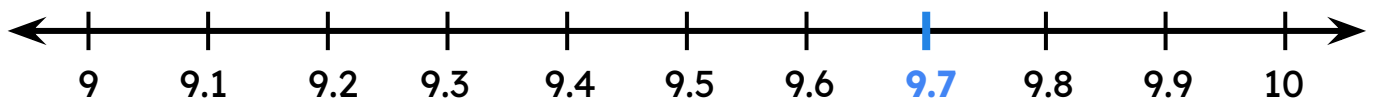
7.2 rounds to 8 when rounded to the nearest whole.



True

False

9.7 rounds to 9 when rounded to the nearest whole.



True

False

