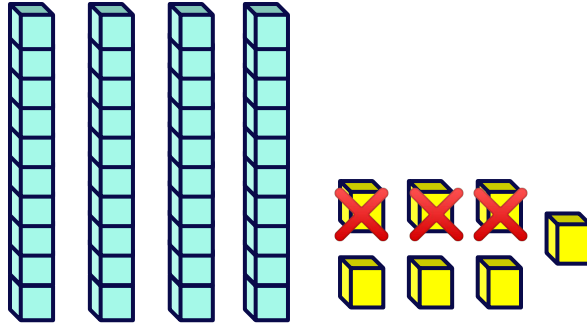


## Subtraction Model Representation

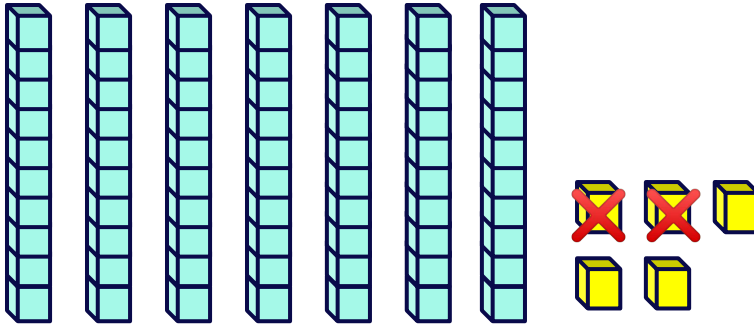
Circle the option that correctly represents the model.



$47 - 30$

$47 - 3$

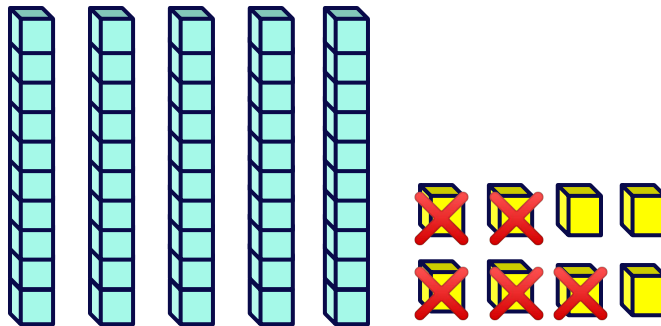
$74 - 3$



$75 - 2$

$75 - 20$

$57 - 2$



$85 - 5$

$58 - 50$

$58 - 5$