


Addition Expressions

Circle the correct expression.


Sam ate 2 apples on Monday and 4 apples on Tuesday. Which expression correctly represents this situation?



$$4 + 0$$

$$2 + 4$$

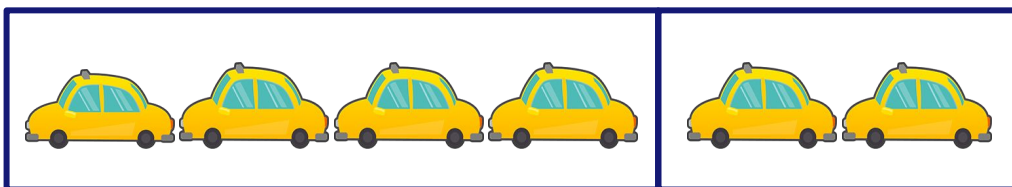
Ben had 3 tennis balls and he got 5 more tennis balls. Which expression correctly represents this situation?



$$3 + 5$$

$$3 + 0$$

Bill had 4 toy cars and he got 2 more from Mia. Which expression correctly represents this situation?



$$4 + 6$$

$$4 + 2$$