


## Subtraction Expression

Circle the correct expression.


Leo bought 6 mushrooms. He ate 2 mushrooms. Which expression correctly represents this situation?



$$4 - 2$$

$$6 - 2$$

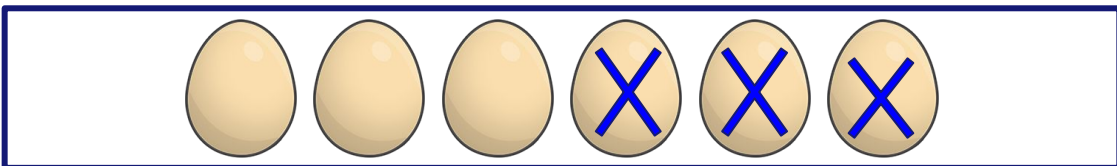
Jim saw 8 cats playing in the garden. 5 went away to chase a mouse. Which expression correctly represents this situation?



$$8 - 5$$

$$5 - 3$$

Jade bought 6 eggs from the store. 3 of them were broken. Which expression correctly represents this situation?



$$3 - 3$$

$$6 - 3$$