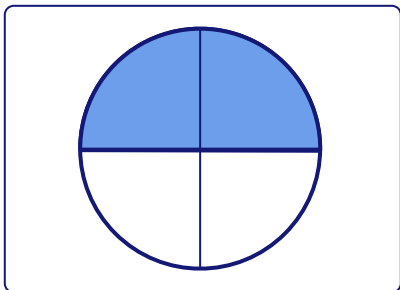


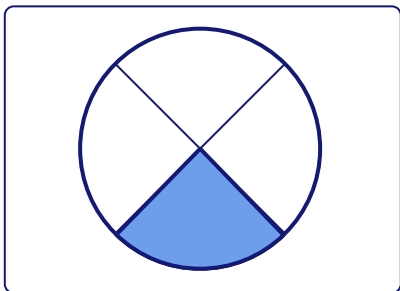
True or False

Identify each statement as true or false and tick the correct option.



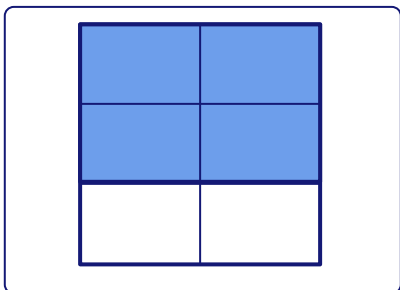
Fraction for the shaded part is $\frac{2}{4}$.

- True
- False



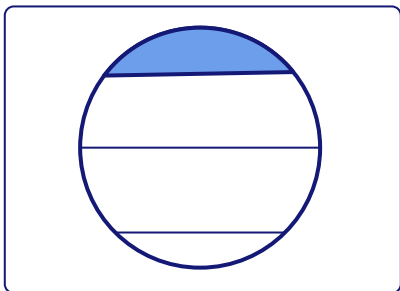
Fraction for the shaded part is $\frac{1}{3}$.

- True
- False



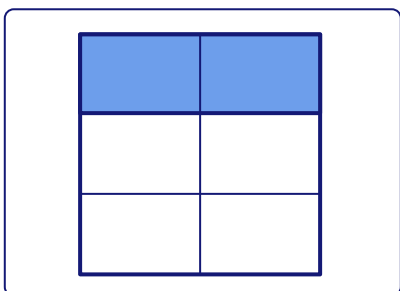
Fraction for the shaded part is $\frac{4}{6}$.

- True
- False



Fraction for the shaded part is $\frac{1}{4}$.

- True
- False



Fraction for the shaded part is $\frac{6}{2}$.

- True
- False