



Shade and Compare Fractions

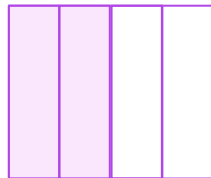
Shade the appropriate number of parts of the second model and fill in the missing number so that the given comparison is correct.



$$\frac{3}{5}$$




$$\frac{\square}{5}$$



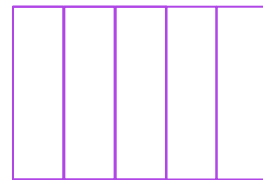
$$\frac{2}{4}$$



$$\frac{\square}{4}$$



$$\frac{4}{5}$$



$$\frac{\square}{5}$$

