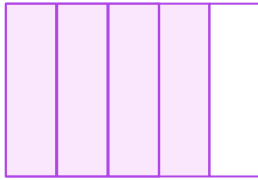
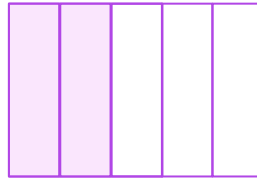


# Write and Order Fractions


Shade the appropriate number of parts of the third model and fill in the missing number so that the order is correct.



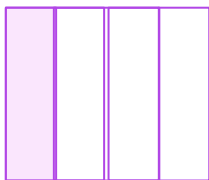
$$\frac{4}{5}$$



$$\frac{2}{5}$$



$$\frac{\square}{5}$$



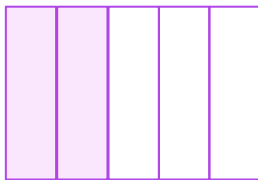
$$\frac{1}{4}$$



$$\frac{2}{4}$$



$$\frac{\square}{4}$$



$$\frac{2}{5}$$



$$\frac{4}{5}$$



$$\frac{\square}{5}$$

