



Color and Add


Color the shapes to represent the addition sentence and then find the answer as shown.



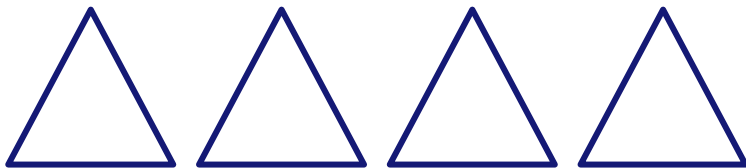
$$1 + 3 = \underline{\quad}$$




$$2 + 1 = \underline{\quad}$$



$$1 + 4 = \underline{\quad}$$



$$2 + 2 = \underline{\quad}$$



$$3 + 2 = \underline{\quad}$$