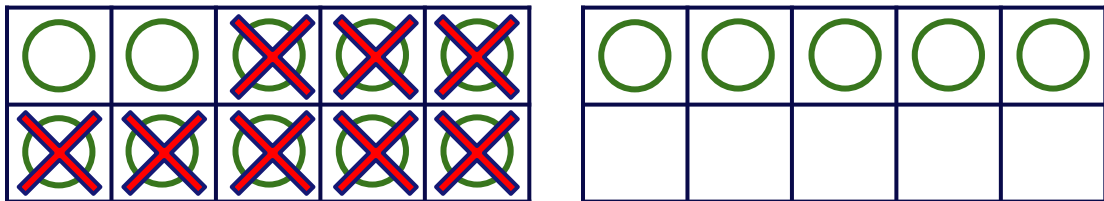
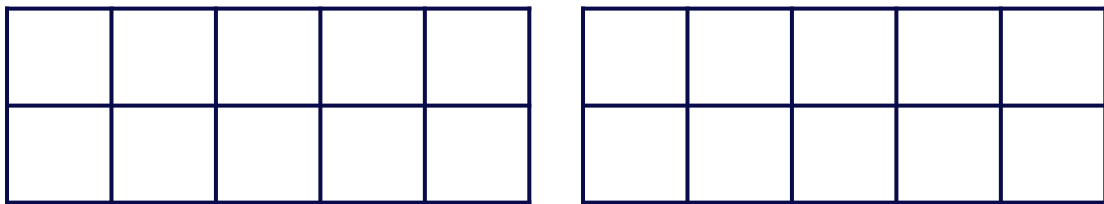


## Subtraction Model

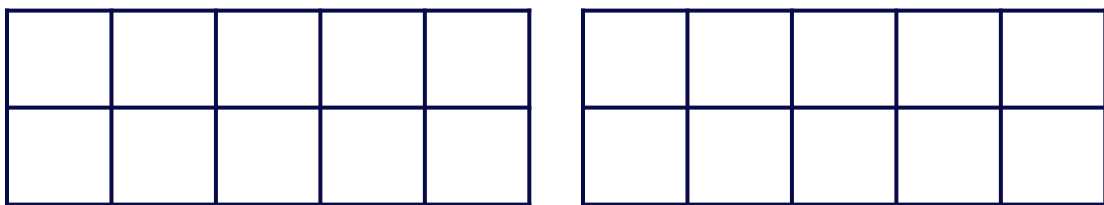
Subtract the numbers by taking away from 10. Use the model if required for help.



$$15 - 8 = 10 - \underline{\quad} + \square = \square$$



$$12 - 4 = 10 - \underline{\quad} + \square = \square$$



$$14 - 9 = 10 - \underline{\quad} + \square = \square$$