




## Subtraction Model

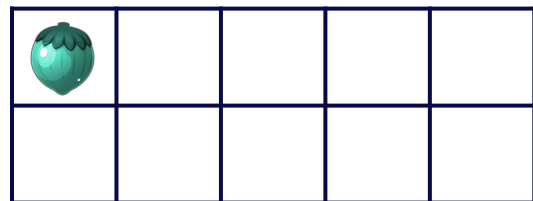

Use the model to fill the missing numbers.



$$13 - 4 = 10 - \underline{\quad} + \square$$



$$16 - 8 = 10 - \underline{\quad} + \square$$



$$11 - 5 = 10 - \underline{\quad} + \square$$