

Take Away

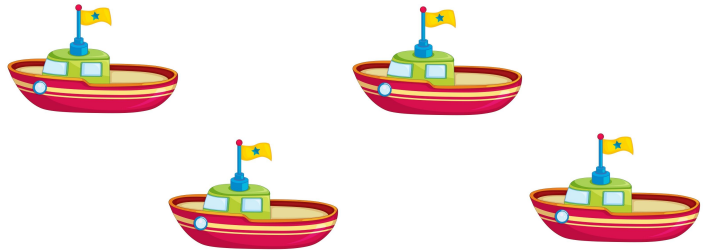
Draw a cross on the object that has been "taken away" and complete the subtraction sentence.

1 cookie was taken away.




$$\square - 1 = \square$$

1 boat was taken away.




$$4 - \square = \square$$

2 apples were taken away.



$$4 - \square = \square$$

2 eggs were taken away.



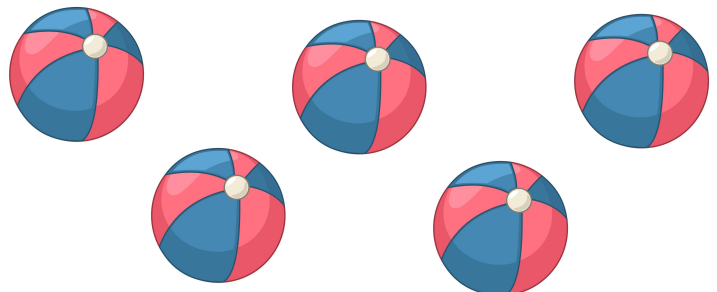
$$\square - 2 = \square$$

3 candies were taken away.



$$\square - 3 = \square$$

3 balls were taken away.



$$\square - \square = \square$$