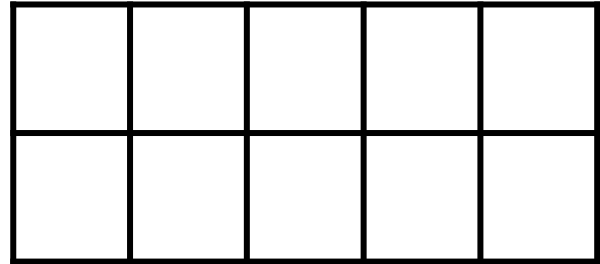



## Let's Draw Some More

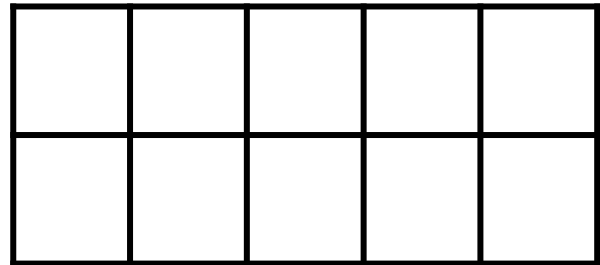

Draw more vegetables to make the total number.

There are 10 carrots. Draw more to make 12 carrots in all.




\_\_\_\_\_ and \_\_\_\_\_ make 12

There are 10 eggplants. Draw more to make 15 eggplants in all.



\_\_\_\_\_ and \_\_\_\_\_ make 15

There are 10 radishes. Draw more to make 18 radishes in all.



\_\_\_\_\_ and \_\_\_\_\_ make 18