



Addition Model


Use the model to make a 10 and then add the numbers.



$$8 + 4 = 10 + \square = \square$$



$$9 + 8 = 10 + \square = \square$$



$$7 + 7 = \square + \square = \square$$