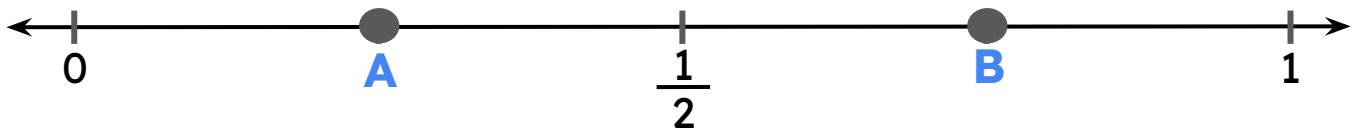


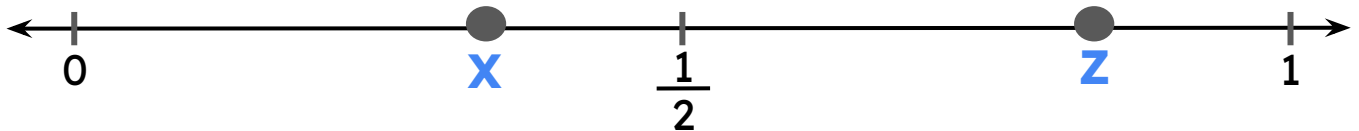
Fractions on Number Line

Use the benchmark to identify the fractions.

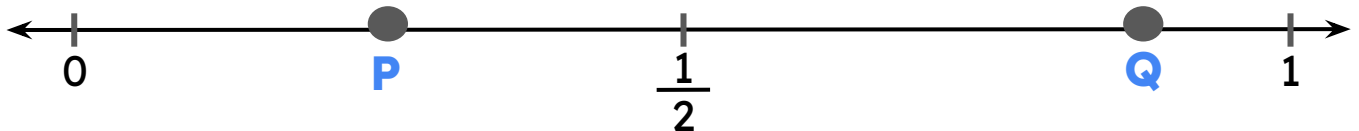
Hint: Compare whether the fraction is greater or less than half.



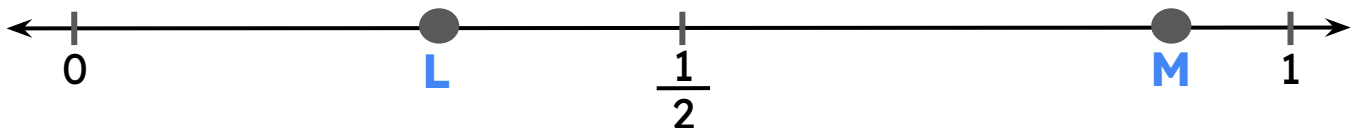
The fraction $\frac{3}{4}$ is represented by the letter ____.



The fraction $\frac{2}{6}$ is represented by the letter ____.



The fraction $\frac{7}{8}$ is represented by the letter ____.



The fraction $\frac{9}{10}$ is represented by the letter ____.

