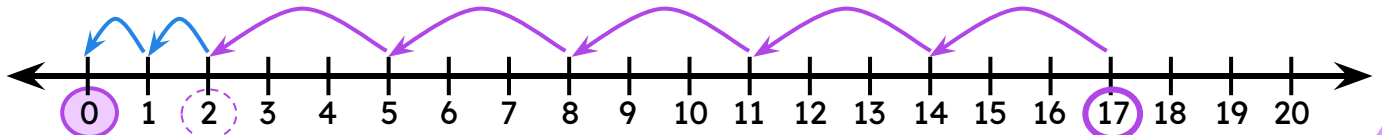


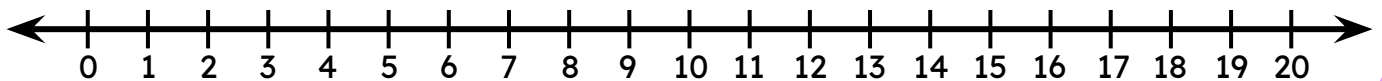
Use Number Line to Divide

Draw jumps on the number line to find the quotient and the remainder.

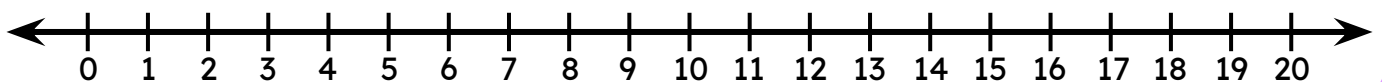
$$17 \div 3 = \square \text{ R } \square$$



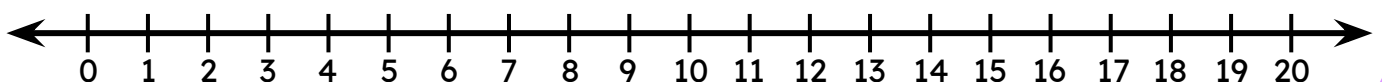
$$13 \div 6 = \square \text{ R } \square$$



$$18 \div 5 = \square \text{ R } \square$$



$$19 \div 4 = \square \text{ R } \square$$



$$20 \div 7 = \square \text{ R } \square$$

