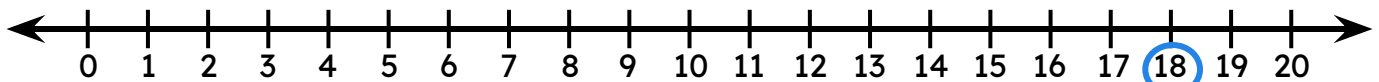


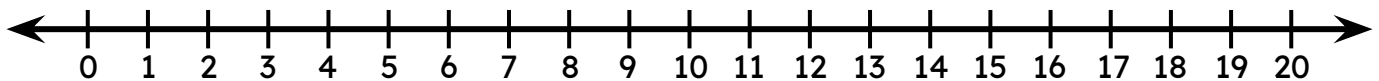
Use Number Line to Divide

Draw jumps on the number line to divide and find the quotient.

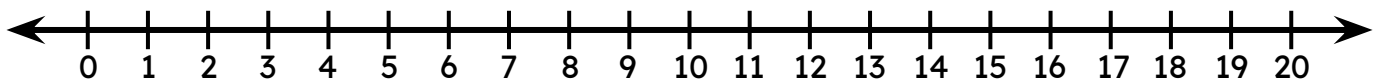
$$18 \div 3 = \square$$



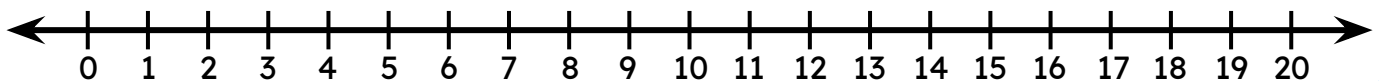
$$12 \div 6 = \square$$



$$16 \div 4 = \square$$



$$20 \div 4 = \square$$



$$15 \div 3 = \square$$

