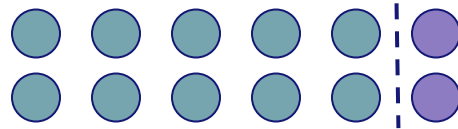
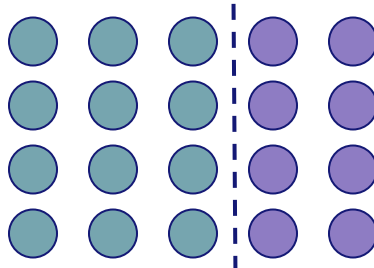


## Missing Expressions

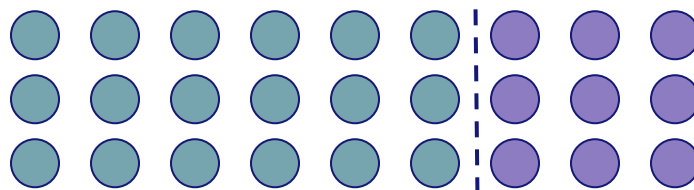
Use the arrays to complete the equations.



$$\boxed{2} \times \boxed{6} = \boxed{2} \times \boxed{5} + \boxed{\phantom{00}} \times \boxed{\phantom{00}}$$



$$\boxed{4} \times \boxed{5} = \boxed{4} \times \boxed{3} + \boxed{\phantom{00}} \times \boxed{\phantom{00}}$$



$$\boxed{3} \times \boxed{9} = \boxed{\phantom{00}} \times \boxed{\phantom{00}} + \boxed{\phantom{00}} \times \boxed{\phantom{00}}$$