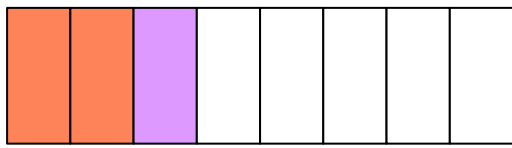


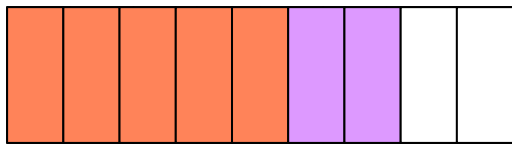
Check Fraction Addition Model

Oolzoo, Hoppy and Chi drew fraction models to add fractions. Check if they did it correctly or not.


$$\frac{2}{8} + \frac{1}{8} = \frac{5}{8}$$

Correct Incorrect

$$\frac{6}{9} + \frac{2}{9} = \frac{7}{9}$$

Correct Incorrect

$$\frac{1}{6} + \frac{4}{6} = \frac{5}{6}$$

Correct Incorrect