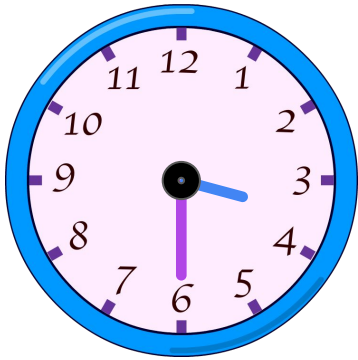


Check Hour Hand Positions

Check if Oolzoo, Hoppy, and Chi correctly describe the position of the hour hand on their respective clocks.

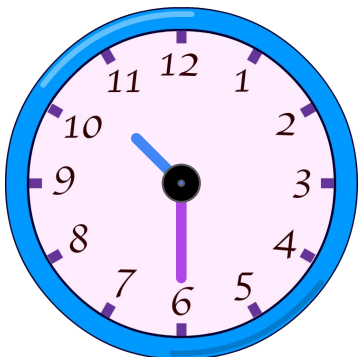


The hour hand is at 6.



Correct

Incorrect

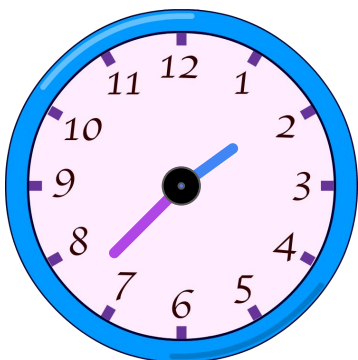


The hour hand is between 10 and 11.



Correct

Incorrect



The hour hand is between 1 and 2.



Correct

Incorrect

