


Let's Find the Missing Number


Complete the addition statement.




$$5 + \square = 7$$



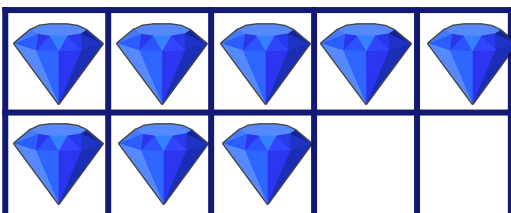
$$4 + \square = 9$$



$$3 + \square = 5$$



$$4 + \square = 7$$



$$5 + \square = 8$$