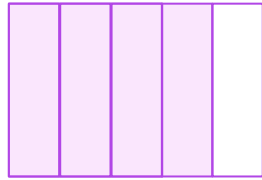
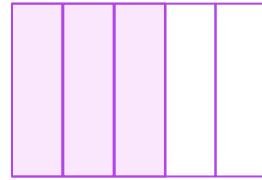



Write and Compare Fractions

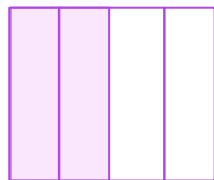
Complete the fraction below each model and use “>” or “<” sign to compare them.




$$\frac{\square}{5}$$



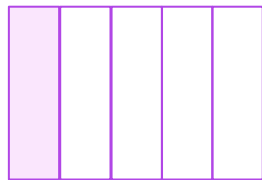
$$\frac{\square}{5}$$



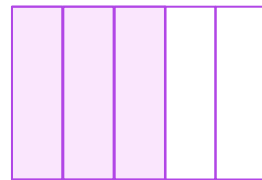

$$\frac{\square}{4}$$



$$\frac{\square}{4}$$



$$\frac{\square}{5}$$



$$\frac{\square}{5}$$

