
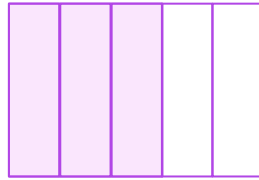



Write and Order Fractions

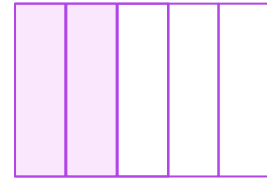

Complete the fraction below each model and use “>” or “<” sign to order them.



$$\frac{\square}{5}$$



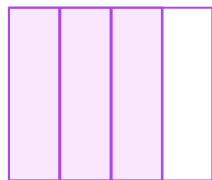

$$\frac{\square}{5}$$





$$\frac{\square}{5}$$




$$\frac{\square}{4}$$



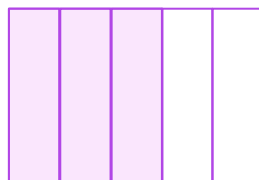

$$\frac{\square}{4}$$





$$\frac{\square}{4}$$



$$\frac{\square}{5}$$



$$\frac{\square}{5}$$



$$\frac{\square}{5}$$

