


# Multiplication Sentences

Write two multiplication sentences for each set. (Row-wise and column-wise)

1




$$\underline{\quad} \times \underline{\quad} = \underline{\quad}$$

**AND**

$$\underline{\quad} \times \underline{\quad} = \underline{\quad}$$

2




$$\underline{\quad} \times \underline{\quad} = \underline{\quad}$$

**AND**

$$\underline{\quad} \times \underline{\quad} = \underline{\quad}$$

3



$$\underline{\quad} \times \underline{\quad} = \underline{\quad}$$

**AND**

$$\underline{\quad} \times \underline{\quad} = \underline{\quad}$$